



2024/2025

**Math
Department**

My name is:

Grade One: ()

Subject: Fourth Math Assessment Notification

Date: / / 2025

Dear parents,

Kindly be informed that our **Fourth Math Assessment will be on Monday; December 22nd, 2025.** Our students will be evaluated in the following:

***Chapter Three: Introducing Addition and Subtraction**

-Math book: page. (18)

-Booklet pages: (6,7,8)

***Answer the following addition and subtraction equations.**

6 + 2 =	10 - 2 =
5 + 4 =	7 - 5 =
2 + 3 =	6 - 3 =
3 + 4 =	4 - 1 =

****Chapter Four: Length and Capacity**

--Math book: pages. (22, 25, 27)




Booklet pages (9, 10)

1. Order objects according to length page (27)

***Color the longest object.**



*Color the shortest object.




2. Compare and order objects according to capacity Page. (22)

*Order the following cups from the one that holds less to the one that holds more.



A



B



C

The correct order is:

***** Students will be asked to:**

- Order objects according to their (length, capacity).
- Color objects (bring your crayons with you!)
- Answer addition and subtraction equations.

